



<https://xtremepape.rs/>

Fig. 1.1 for Question 1

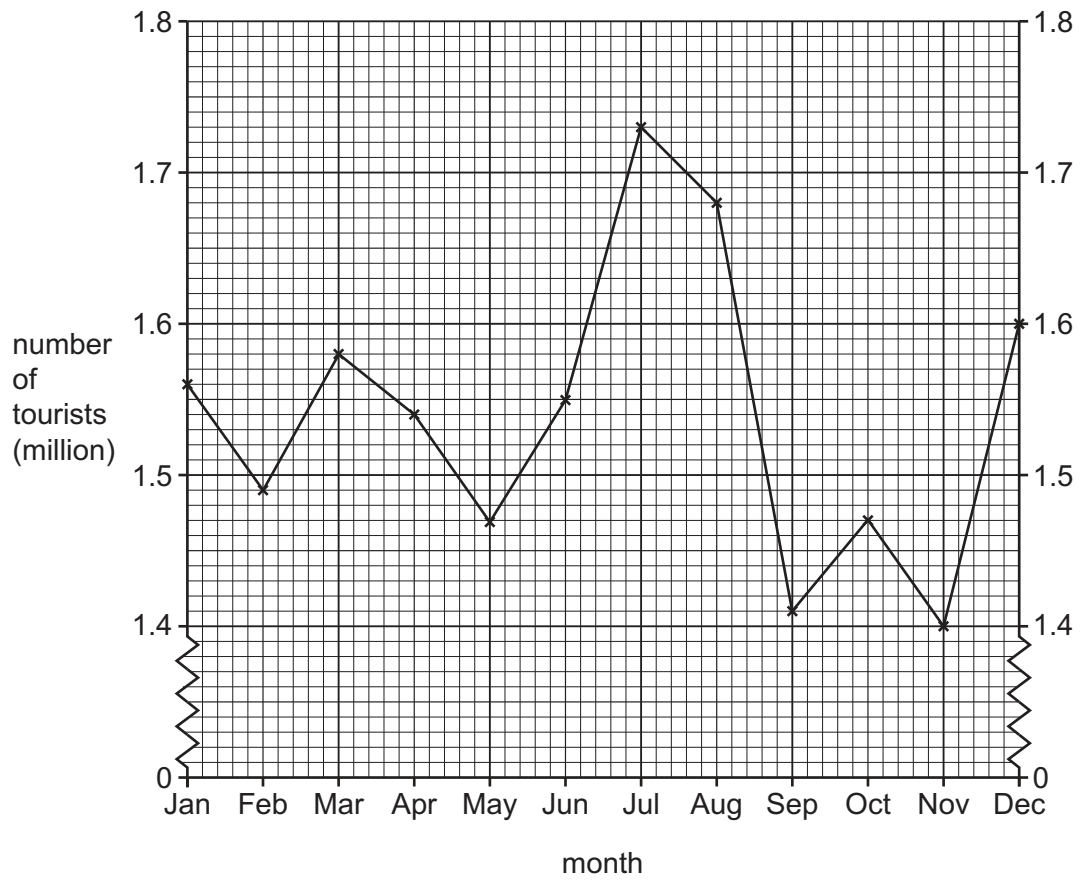
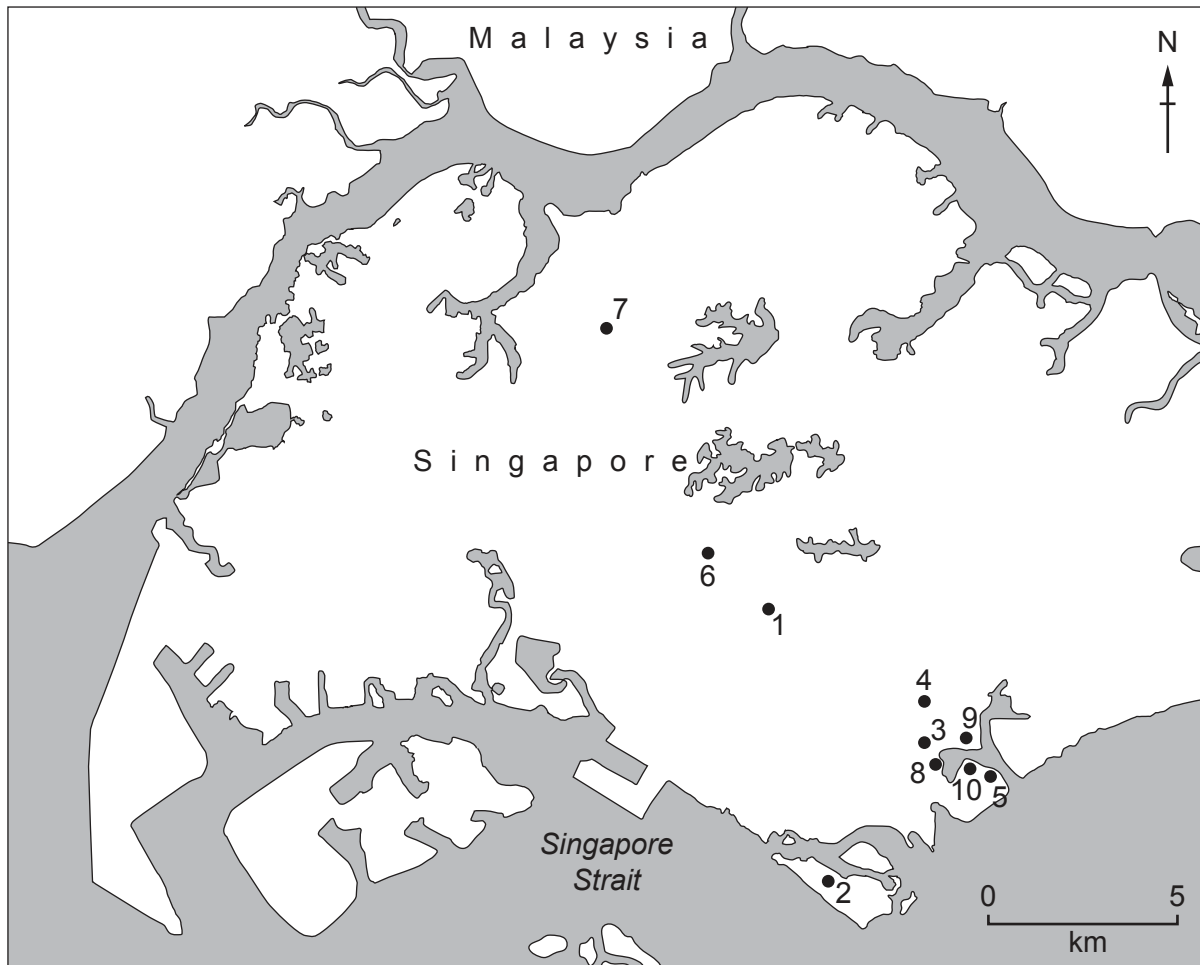
**Variation in number of international tourists visiting Singapore in 2018**

Fig. 1.3 for Question 1

## Tourist attractions in Singapore

**Key**

1. Orchard Road shops and malls
2. Resorts World on Sentosa Island
3. Clarke Quay on the Singapore River
4. Raffles Hotel
5. Gardens by the Bay
6. Botanic Gardens
7. Singapore Zoo and Night Safari
8. Asian Civilisations Museum
9. Singapore Flyer giant Ferris wheel
10. Marina Bay Sands Resort

Fig. 1.4 for Question 1

## Tourist Questionnaire

I am doing a survey of tourists to Singapore for my Geography fieldwork task. Please can you answer the following questions?

1. Which age group are you in?

☐

under 20

☐

20-40

☐

41-60

☐

over 60

2. Which country do you live in? .....

3. Please rank the following attractions to show the five you most like (1-5).

☐

Orchard Road shops and malls

☐

Resorts World on Sentosa Island

☐

Clarke Quay on the Singapore River

☐

Raffles Hotel

☐

Gardens by the Bay

☐

Botanic Gardens

☐

Singapore Zoo and Night Safari

☐

Asian Civilisations Museum

☐

Singapore Flyer giant Ferris wheel

☐

Marina Bay Sands Resort

Thank you for your time.

### Table 1.1 for Question 1

Africa		N America		S America		Asia		Europe		Oceania	
South Africa	1	USA	4	Brazil	3	China	18	UK	5	Australia	4
		Canada	2	Argentina	1	Indonesia	14	Germany	4	New Zealand	2
		Mexico	1			India	7	France	3		
						Japan	4	Netherlands	2		
						Malaysia	4	Russia	2		
						Philippines	3	Switzerland	2		
						South Korea	3	Ukraine	2		
						Hong Kong	2	Italy	1		
						Thailand	2	Norway	1		
						Vietnam	2	Poland	1		
						Oman	1				
total	1		7		4		60		23		6

Table 1.2 for Question 1

## Under 20 age group results of Question 3

attraction	number of tourists giving each rank				
	rank 1	rank 2	rank 3	rank 4	rank 5
Orchard Road shops and malls	2	1	4	3	1
Resorts World on Sentosa Island	10	8	2	0	0
Clarke Quay on the Singapore River	0	0	1	1	1
Raffles Hotel	0	0	0	1	1
Gardens by the Bay	1	0	3	5	3
Botanic Gardens	0	0	0	1	2
Singapore Zoo and Night Safari	1	1	2	2	5
Asian Civilisations Museum	0	0	0	0	1
Singapore Flyer giant Ferris wheel	3	2	2	5	5
Marina Bay Sands Resort	3	8	6	2	1

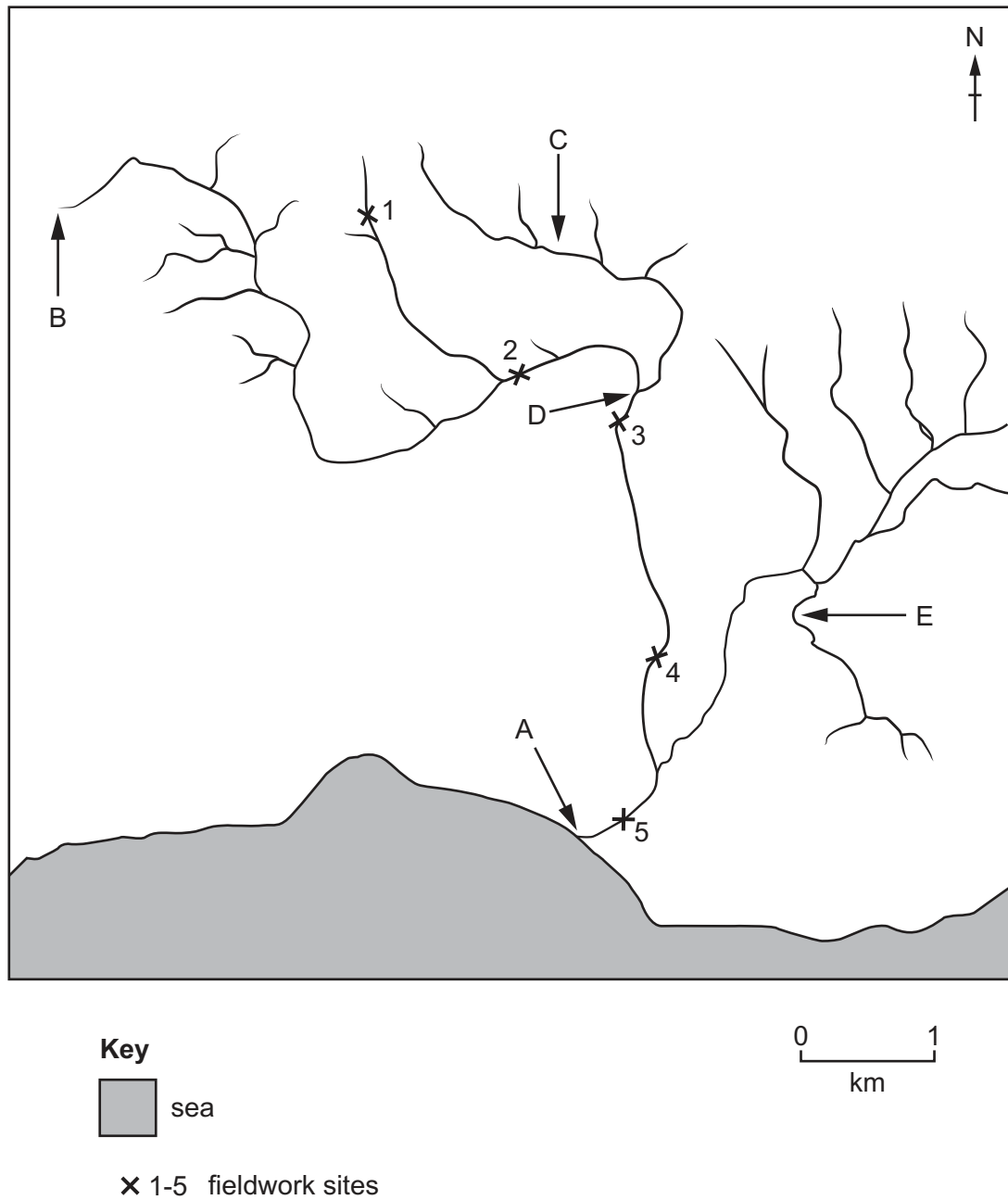
Table 1.4 for Question 1

## Total scores given by each age group

attraction	total score for each age group			
	under 20	20–40	41–60	over 60
Orchard Road shops and malls	33	42	11	14
Resorts World on Sentosa Island	88	50	8	9
Clarke Quay on the Singapore River	6	22	30	37
Raffles Hotel	3	29	50	66
Gardens by the Bay	27	30	69	59
Botanic Gardens	4	10	24	46
Singapore Zoo and Night Safari	24	20	53	22
Asian Civilisations Museum	1	3	14	28
Singapore Flyer giant Ferris wheel	44	18	2	1
Marina Bay Sands Resort	70	76	39	18

Fig. 2.1 for Question 2

## River fieldwork sites



**Fig. 2.2 for Question 2**

**Measuring the river width**





Fig. 2.3 for Question 2

Measuring the river depth



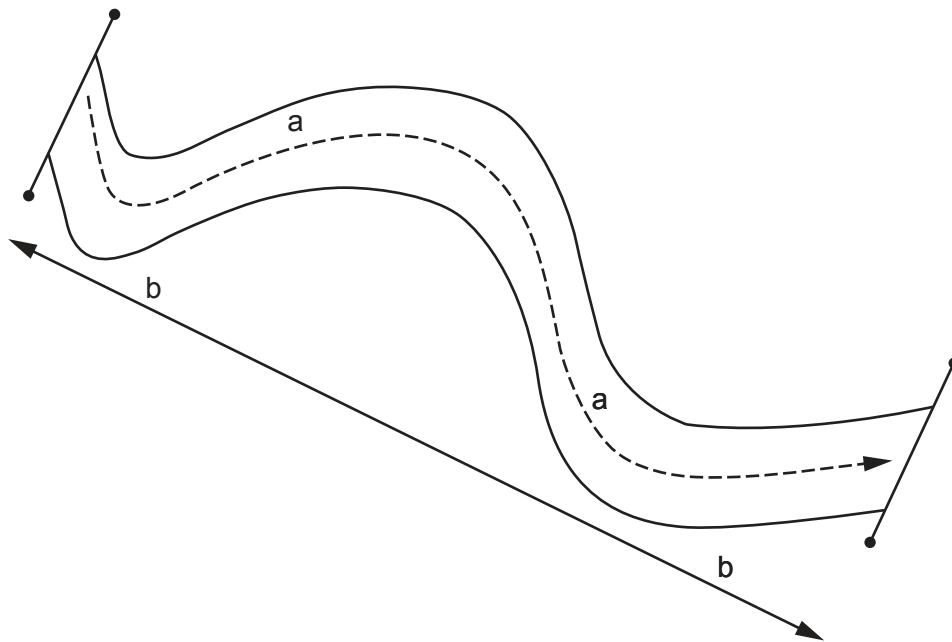
Table 2.2 for Question 2

River discharge at the five sites

fieldwork site	discharge (cumecs)
1	0.12
2	0.60
3	1.10
4	<b>1.40</b>
5	2.62

Fig. 2.5 for Question 2

## How to calculate sinuosity



$$\text{Sinuosity} = \frac{a}{b}$$

a is the distance measured along the river (m)

b is the straight line distance (m)

Table 2.3 for Question 2

## Sinuosity score at the five fieldwork sites


site number		distance measured along river (m)	straight line distance (m)	sinuosity score
1	upstream  downstream	118.0	100	1.18
2		116.2	100	1.16
3		137.1	100	1.37
4		129.7	100	<b>1.30</b>
5		162.7	100	1.63

Fig. 2.7 for Question 2

River meanders



**BLANK PAGE**

---

The boundaries and names shown, the designations used and the presentation of material on any maps contained in this question paper/insert do not imply official endorsement or acceptance by Cambridge Assessment International Education concerning the legal status of any country, territory, or area or any of its authorities, or of the delimitation of its frontiers or boundaries.

Permission to reproduce items where third-party owned material protected by copyright is included has been sought and cleared where possible. Every reasonable effort has been made by the publisher (UCLES) to trace copyright holders, but if any items requiring clearance have unwittingly been included, the publisher will be pleased to make amends at the earliest possible opportunity.

To avoid the issue of disclosure of answer-related information to candidates, all copyright acknowledgements are reproduced online in the Cambridge Assessment International Education Copyright Acknowledgements Booklet. This is produced for each series of examinations and is freely available to download at [www.cambridgeinternational.org](http://www.cambridgeinternational.org) after the live examination series.

Cambridge Assessment International Education is part of Cambridge Assessment. Cambridge Assessment is the brand name of the University of Cambridge Local Examinations Syndicate (UCLES), which is a department of the University of Cambridge.